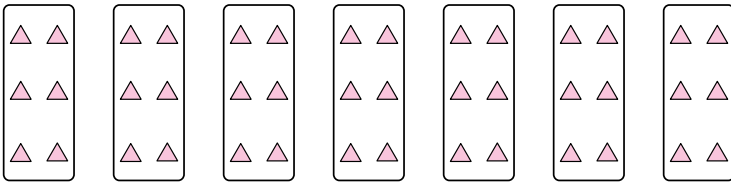




Express each set as a multiplication problem.

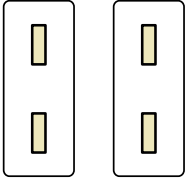
Ex)



**Answers**

Ex.  $7 \times 6 = 42$


1)



1. \_\_\_\_\_

2. \_\_\_\_\_


2)



3. \_\_\_\_\_

4. \_\_\_\_\_

3)

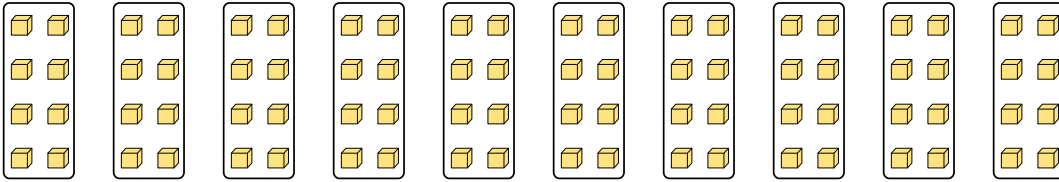


5. \_\_\_\_\_

6. \_\_\_\_\_

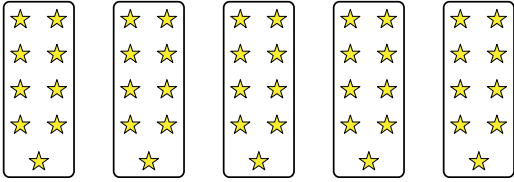
7. \_\_\_\_\_

4)

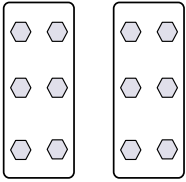


8. \_\_\_\_\_

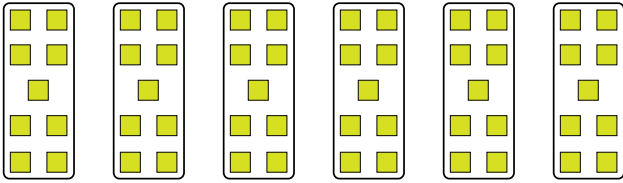
5)



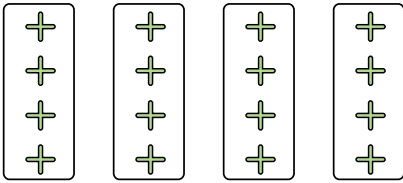
6)



7)



8)





Express each set as a multiplication problem.

Ex)

Answers

Ex. 7×6=42

1)

1. 2×2=4

2. 4×6=24

2)

3. 6×8=48

4. 10×8=80

3)

5. 5×9=45

6. 2×6=12

4)

7. 6×9=54

8. 4×4=16

5)

6)

7)

8)